



K.P.C PUBLIC SCHOOL
IV ASSESSMENT EXAMINATION 2023 - 24

Std: II
Time: 2 hours

Subject: Maths
Marks: 50 M

Name: _____

Date: _____

Roll no: _____

Class Teacher's Sign: _____

Marks Obtained: _____

Q1. Fill in the blanks:

[14M]



Rough work

- 1) 5th day of the week is _____.
- 2) In a leap year there are _____ days.
- 3) _____ comes in between Tuesday and Thursday.
- 4) _____ past 8 means 8:30.
- 5) In 1 hour, there are _____ minutes.
- 6) A day is divided into _____ parts.
- 7) _____ comes before Saturday.
- 8) Tuesday comes after _____.
- 9) 4 rupees means _____ paise.
- 10) Half past 5 means _____.
- 11) _____ comes before March.
- 12) There are _____ days in August.
- 13) There are _____ days in a week.
- 14) Half past _____ means 10:30.


Q2. Solve the following:

[16M]


A. Write the time shown by these clocks.



B. Draw the hands in the following clocks to show the respective time.



10 o'clock



Half past 8

C. Addition and Subtraction.

1. ₹ 135 + ₹ 128

H	T	O

2. ₹ 392 - ₹ 147

H	T	O

3. ₹ 250 - ₹ 149

H	T	O

4. ₹ 301 + ₹ 99

H	T	O

Q3. Solve the following.

[12M]

Look the tables and answer the following questions in one sentence.

1.	Ice - cream flavours	No. of students
	Strawberry	20
	Mango	25
	Chocolate	30

a. Which ice-cream is most liked by students?

Ans: _____

b. How many students like mango and strawberry flavour?

Ans: _____

c. How many more children like mango than strawberry?

Ans: _____

b. Which animal is least in number?

Ans: _____

c. How many animals are there altogether?

Ans: _____

Q4. Word problem:

[8M]

1. Sonali had ₹ 235 with her. She spent ₹ 128 to buy a gift for her friend.
Now how much money left with her?

Sol: Given: _____

To find: _____

	H	T	O

Ans: _____

2. Angle had ₹ 332 with her. Her father gave her ₹ 109. How much money does she has now?

Sol: Given: _____

To find: _____

	H	T	O

Ans: _____

b. Which animal is least in number?

Ans: _____

c. How many animals are there altogether?

Ans: _____

Q4. Word problem:

[8M]

1. Sonali had ₹ 235 with her. She spent ₹ 128 to buy a gift for her friend.
Now how much money left with her?

Sol: Given: _____

To find: _____

	H	T	O

Ans: _____

2. Angle had ₹ 332 with her. Her father gave her ₹ 109. How much money does she have now?

Sol: Given: _____

To find: _____

	H	T	O

Ans: _____